

# MASTERY CHECK

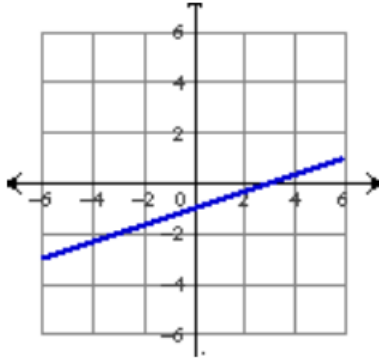
NAME: \_\_\_\_\_

Graph Linear Equations

DATE: \_\_\_\_\_

Section 5.2

State the x and y intercept

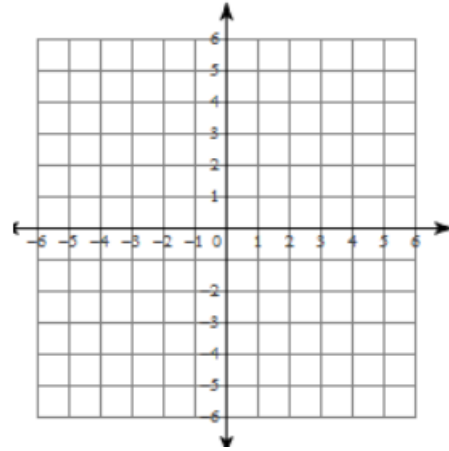


x-intercept =

y-intercept =

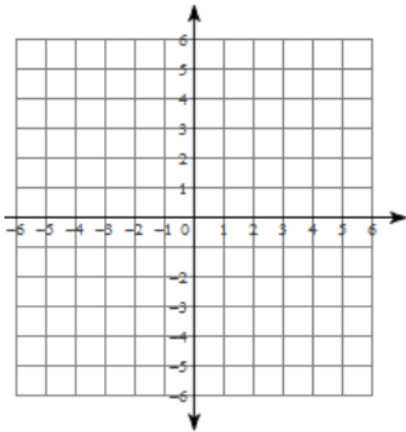
Graph the following using x and y intercepts

x-intercept = 1, y-intercept = 3

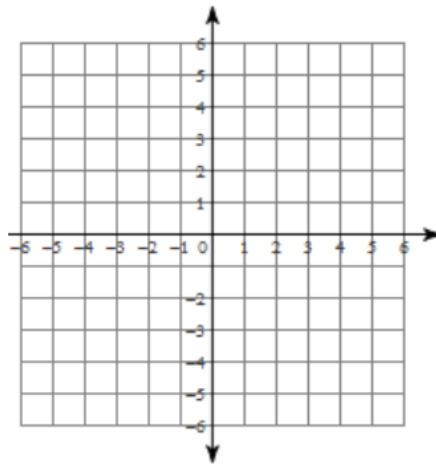


Find the x and y intercepts of the graph of the equation. Then graph it

$$x - 2y = 6$$



$$8x + 3y = -15$$



$$y = -1$$

